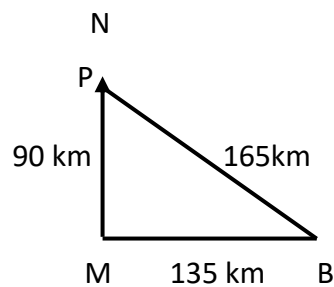
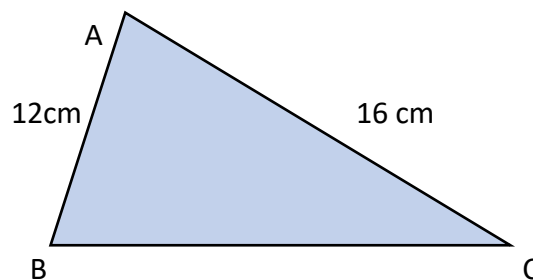


Round all answers to an appropriate degree of accuracy unless specifically stated

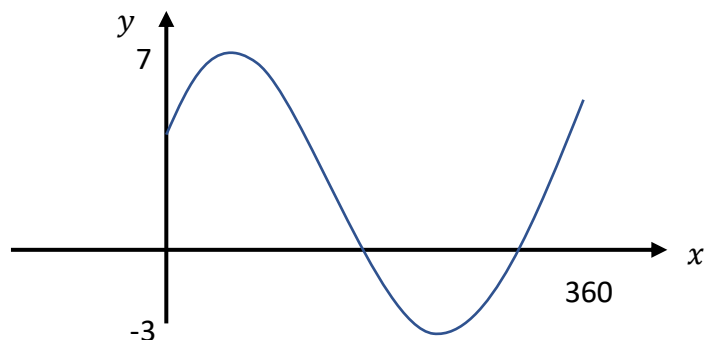
1. A cup of coffee is served to 83°C . It cools at a rate of 7.5% per minute.
Calculate its temperature after 8 minutes.
2. Portland is due North of Maryland at a distance of 90 km.
Buckton is 165km from Portland and 135km from Maryland.
Is Buckton due east of Maryland? Show all your working.



3. If $\sin A = \frac{7}{8}$, calculate the area of triangle ABC shown below.



4. Solve
 $4\tan x + 3 = 0$. $0 < x < 360^{\circ}$
5. The graph below has equation $y = a\sin x + b$
State the values of a and b .



6. Express as a single fraction in its simplest form.

$$\frac{3}{2x} - \frac{3}{5x^2}$$